

Name: _____

Klasse 1/1.Blatt

Schreibe die Zahlen von 1 - 10!

Wie heißen die Zahlennachbarn?

2 5 7 3

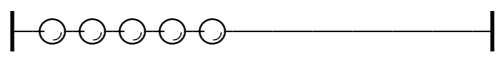

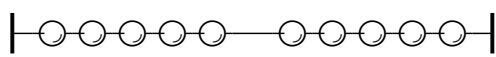
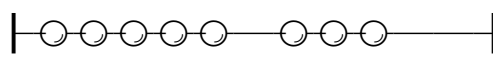
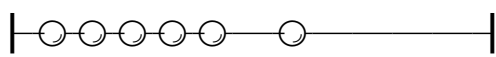


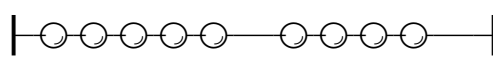


4 6 8

Schreibe die fehlenden Zahlen auf!

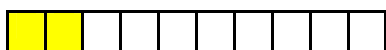
3 5 7 3

4 6 8 9

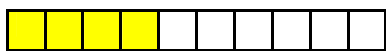
Schreibe die richtige Zahl daneben!

	<input type="text"/>		<input type="text"/>
	<input type="text"/>		<input type="text"/>
	<input type="text"/>		<input type="text"/>
	<input type="text"/>		<input type="text"/>
	<input type="text"/>		<input type="text"/>

Kannst du schon ergänzen?



2 + = 10



4 + = 10



5 + = 10



7 + = 10



9 + = 10



8 + = 10



6 + = 10



3 + = 10



10 + = 10



1 + = 10