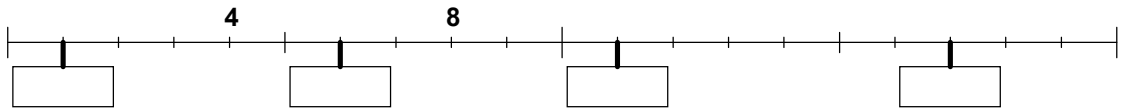
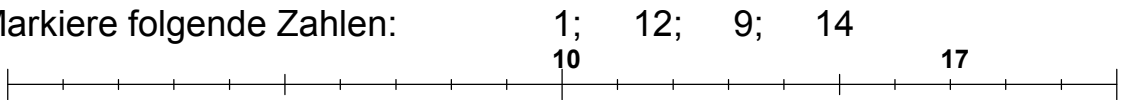




1. Bestimme die Zahlen an den markierten Stellen



2. Markiere folgende Zahlen:



3. $6 + 2 = \square$ $4 + 2 = \square$ $2 + 2 = \square$

4. $5 + 5 = \square$ $4 + 5 = \square$ $3 + 7 = \square$

5. $12 + 2 = \square$ $14 + 3 = \square$ $15 + 5 = \square$

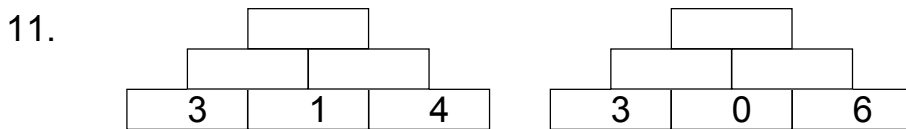
6. $3 + 15 = \square$ $4 + 13 = \square$ $2 + 13 = \square$

7. $10 - 3 = \square$ $7 - 2 = \square$ $7 - 3 = \square$

8. $10 - 6 = \square$ $8 - 5 = \square$ $7 - 4 = \square$

9. $19 - 3 = \square$ $20 - 4 = \square$ $14 - 3 = \square$

10. $20 - 14 = \square$ $13 - 11 = \square$ $19 - 16 = \square$



12.

$-7 \rightarrow$	
14	
16	
8	
17	
9	
12	
18	
7	
10	
13	

$-5 \rightarrow$	
	8
	0
	4
	2
	1
	3
	6
	10
	5
	9

$+4 \rightarrow$	
10	
2	
8	
11	
5	
7	
6	
9	
3	
4	

$-3 \rightarrow$	
6	
	8
	2
10	
4	
13	
12	
14	
	4
3	