

1.) Vergleichen! < > =





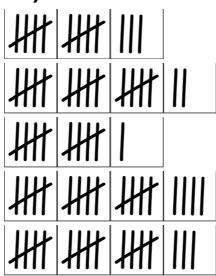
6		1
0		1
1		9
6		5
5		10

16		7
14		15
16		17
3		8
2		10

16		11
5		16
0		6
18		18
20		7

5		9
12		9
16		13
8		2
11		20

2.) Zähle!



3.) Ergänze bis 10!

$$2 + \square = 10$$

$$\square + 10 = 10$$

$$4 + \square = 10$$

$$\square + 9 = 10$$

$$5 + \square = 10$$

$$\square + 3 = 10$$

$$6 + \square = 10$$

4.) Trage die fehlenden Zahlen ein!

$$\square - 2 = 10$$

$$14 - \square = 10$$

$$\square - 8 = 10$$

$$19 - \square = 10$$

$$\square - 5 = 10$$

$$18 - \square = 10$$

$$\square - 1 = 10$$

$$9 - \square = 6$$

$$\square - 5 = 4$$

$$10 - \square = 3$$

$$\square - 13 = 5$$

$$14 - \square = 5$$

$$\square - 17 = 1$$

$$17 - \square = 4$$

4.) Rechenmauern

