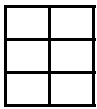



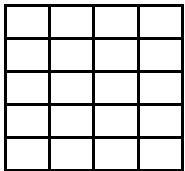
Schreibe zu jeder Zeichnung die passende Rechnung.




$3 \cdot 2 = 6$



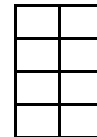
$\underline{\quad} \cdot 6 = \underline{\quad}$



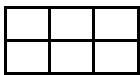
$\underline{\quad} \cdot \underline{\quad} = \underline{\quad}$



$\underline{\quad} \cdot \underline{\quad} = \underline{\quad}$



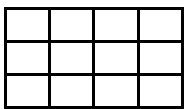
$\underline{\quad} \cdot \underline{\quad} = \underline{\quad}$




$\underline{\quad} \cdot \underline{\quad} = \underline{\quad}$



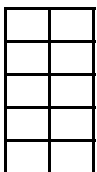
$\underline{\quad} \cdot \underline{\quad} = \underline{\quad}$




$\underline{\quad} \cdot \underline{\quad} = \underline{\quad}$



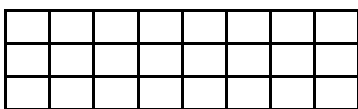
$\underline{\quad} \cdot \underline{\quad} = \underline{\quad}$




$\underline{\quad} \cdot \underline{\quad} = \underline{\quad}$



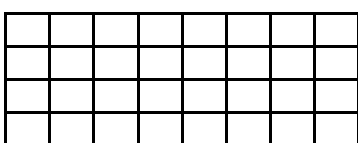
$\underline{\quad} \cdot \underline{\quad} = \underline{\quad}$



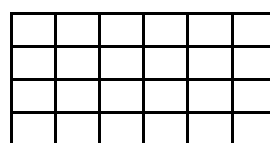
$\underline{\quad} \cdot \underline{\quad} = \underline{\quad}$



$\underline{\quad} \cdot \underline{\quad} = \underline{\quad}$



$\underline{\quad} \cdot \underline{\quad} = \underline{\quad}$



$\underline{\quad} \cdot \underline{\quad} = \underline{\quad}$



$\underline{\quad} \cdot \underline{\quad} = \underline{\quad}$



$\underline{\quad} \cdot \underline{\quad} = \underline{\quad}$