






1. Schreibe beide Uhrzeiten auf!



Uhr

Uhr

Uhr

Uhr

Uhr

Uhr

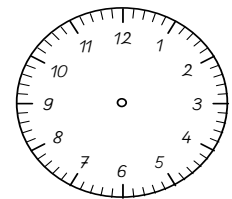
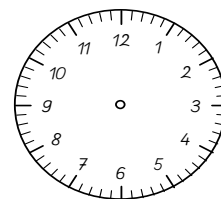
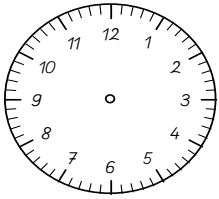
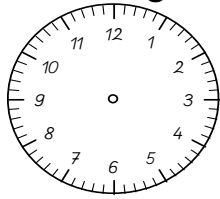
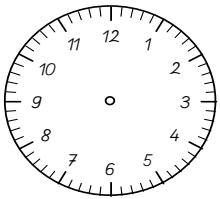
Uhr

Uhr

Uhr

Uhr

2. Zeichne die Uhrzeiger ein!



14:45 Uhr

07:21 Uhr

20:03 Uhr

23:10 Uhr

09:32 Uhr

3. Zähle die Bausteine!

	oben	Mitte	unten		oben	Mitte	unten
	<input type="text"/>	<input type="text"/>	<input type="text"/>		<input type="text"/>	<input type="text"/>	<input type="text"/>
	Gesamt: <input type="text"/>				Gesamt: <input type="text"/>		

	4. <input type="text"/>	3. <input type="text"/>		4. <input type="text"/>	3. <input type="text"/>
	2. <input type="text"/>	1. <input type="text"/>		2. <input type="text"/>	1. <input type="text"/>
	Gesamt: <input type="text"/>			Gesamt: <input type="text"/>	

	oben	<input type="text"/>		oben	<input type="text"/>
	unten			unten	
	Gesamt: <input type="text"/>			Gesamt: <input type="text"/>	

	oben	Mitte	unten		oben	Mitte	unten
	<input type="text"/>	<input type="text"/>	<input type="text"/>		<input type="text"/>	<input type="text"/>	<input type="text"/>
	Gesamt: <input type="text"/>				Gesamt: <input type="text"/>		