
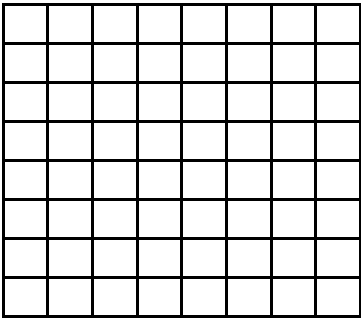
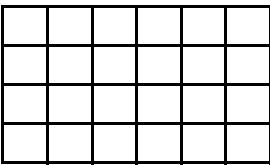
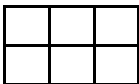
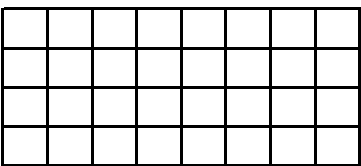
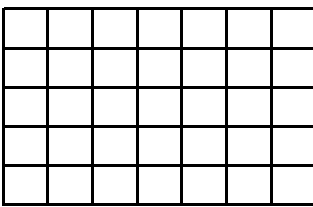
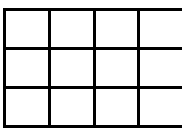


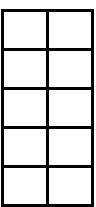
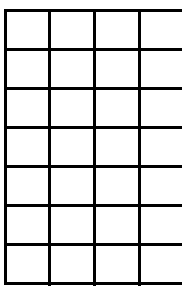

Schreibe zu jeder Zeichnung die passende Rechnung.

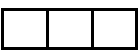


 $\underline{\hspace{2cm}}$ = $\underline{\hspace{2cm}}$

 $\underline{\hspace{2cm}}$ = $\underline{\hspace{2cm}}$


 $\underline{\hspace{2cm}}$ = $\underline{\hspace{2cm}}$

 $\underline{\hspace{2cm}}$ = $\underline{\hspace{2cm}}$


 $\underline{\hspace{2cm}}$ = $\underline{\hspace{2cm}}$

 $\underline{\hspace{2cm}}$ = $\underline{\hspace{2cm}}$


 $\underline{\hspace{2cm}}$ = $\underline{\hspace{2cm}}$

 $\underline{\hspace{2cm}}$ = $\underline{\hspace{2cm}}$


 $\underline{\hspace{2cm}}$ = $\underline{\hspace{2cm}}$

 $\underline{\hspace{2cm}}$ = $\underline{\hspace{2cm}}$

 $\underline{\hspace{2cm}}$ = $\underline{\hspace{2cm}}$


 $\underline{\hspace{2cm}}$ = $\underline{\hspace{2cm}}$

 $\underline{\hspace{2cm}}$ = $\underline{\hspace{2cm}}$


 $\underline{\hspace{2cm}}$ = $\underline{\hspace{2cm}}$

 $\underline{\hspace{2cm}}$ = $\underline{\hspace{2cm}}$